





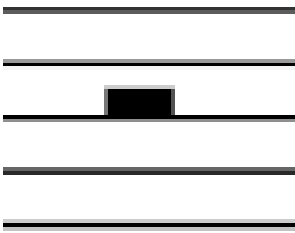
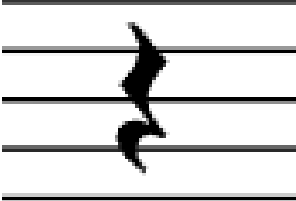


Bass Clef, Rests, and Time Signatures


1. Identify whether each pitch is a line or space note and write the note name of the following pitches.

 Note Name: _____ Circle: LINE or SPACE	 Note Name: _____ Circle: LINE or SPACE	 Note Name: _____ Circle: LINE or SPACE
 Note Name: _____ Circle: LINE or SPACE	 Note Name: _____ Circle: LINE or SPACE	 Note Name: _____ Circle: LINE or SPACE

2. Fill in the blanks.

 This is a _____ rest. It has ____ beats.	 This is a _____ rest. It has ____ beats.
--	---

3. Add bar lines to match the time signature and circle all Middle C's.



**Careful, the time signature changes in this next line!

